



Écris en dessous de chaque objet de la vie courante de quel solide il s'agit

cube	pavé	cylindre	cône	pyramide	sphère
------	------	----------	------	----------	--------





\_\_\_\_\_

\_\_\_\_\_

\_\_\_\_\_

\_\_\_\_\_



\_\_\_\_\_

\_\_\_\_\_

\_\_\_\_\_

\_\_\_\_\_



\_\_\_\_\_

\_\_\_\_\_

\_\_\_\_\_

\_\_\_\_\_