



Nous sommes l'après-midi. Quelle heure indique chaque horloge ?


A




B




C



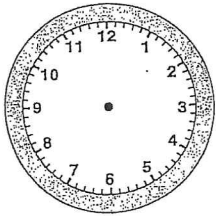
D



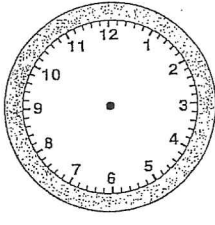
E



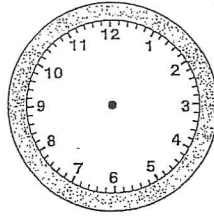
l. Dessine les aiguilles de ces horloges pour indiquer l'heure (la petite aiguille en rouge et la grande en vert).



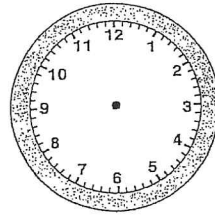
1 h 40



6 h 00

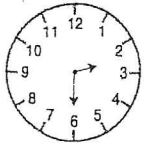


10 h 30



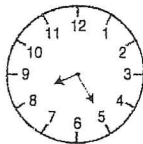
12 h 15

Écris l'heure indiquée par chaque réveil.



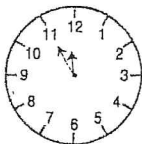
2 h 30 min

14 h 30 min



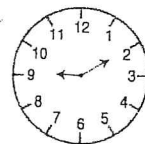
... h ... min

... h ... min



... h ... min

... h ... min



... h ... min

... h ... min