



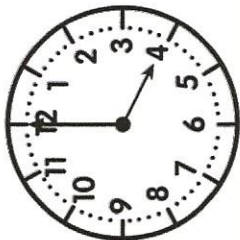
Heure

CE2

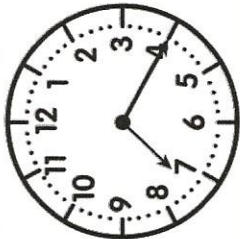


PRÉNOM:

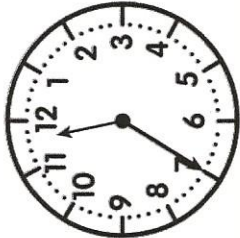
① Ecris l'heure sous chaque horloge. (l'heure du matin et l'heure de l'après-midi ou du soir)



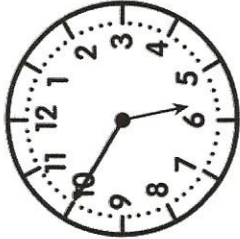
h _ h _



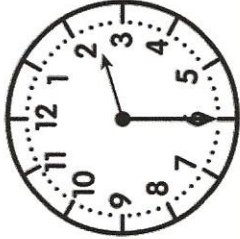
h _ h _



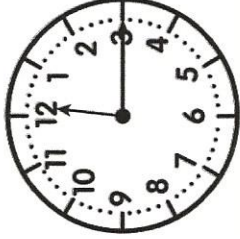
h _ h _



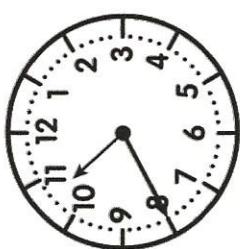
h _ h _




h _ h _




h _ h _




h _ h _




② Trace les aiguilles (rouge pour les heures, bleue pour les minutes).




9 h 00




5 h 15




4 h 30



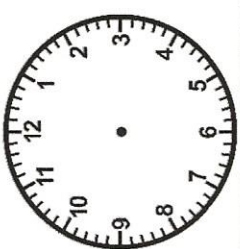
7 h 05



3 h 00



8 h 45



11 h 30



③ Résous ce problème.

Le cours de voile de Lisa a commencé à 9h30. Il dure 45 minutes. À quelle heure
le cours se terminera-t-il ?

